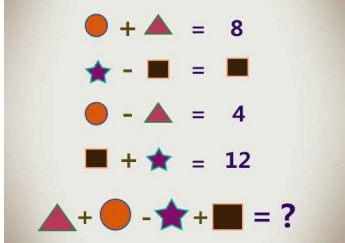

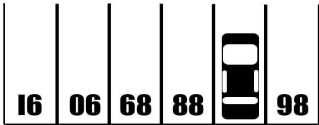

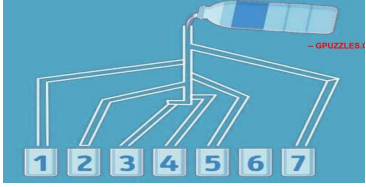


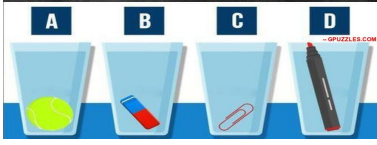

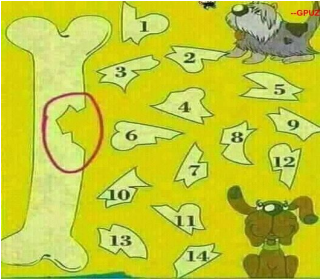











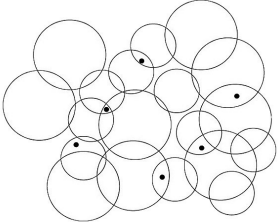
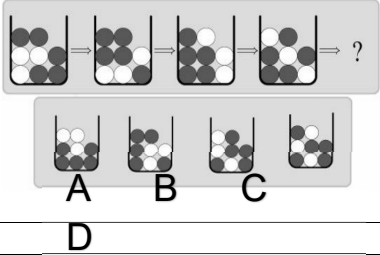

Question ID	Difficulty Level	Question Stimulus	Option No.	Option Text	Option Score
1	M	Which one of the following is not a prime number?	1	31	0
1	M		2	61	0
1	M		3	71	0
1	M		4	91	1
2	M	If a giraffe has two eyes, a monkey has two eyes, and an elephant has two eyes, how many eyes do we have?	1	3	0
2	M		2	4	1
2	M		3	1	0
2	M		4	2	0
3	M	'Rhythm of eyes' city name in India?	1	Chennai	0
3	M		2	Nainital	1
3	M		3	Karnataka	0
3	M		4	Srinagar	0
4	M	They come out at night without being called and are lost in the day without being stolen. What are they?	1	Light	0
4	M		2	Bats	0
4	M		3	Stars	1
4	M		4	Flights	0
5	M	What is black when you buy it, red when you use it, and gray when you throw it away?	1	Shoe	0
5	M		2	Charcoal	1
5	M		3	Belt	0
5	M		4	All the above	0
6	M	Key, Door, Lock, Room, Switch on. Arrange the words given in a meaningful sequence.	1	1, 3, 2, 4, 5	1
6	M		2	4, 2, 1, 5, 3	0
6	M		3	1, 2, 3, 5, 4	0
6	M		4	5, 1, 2, 4, 3	0
7	M	What has teeth but cannot bite?	1	Saw	0
7	M		2	Zipper	0
7	M		3	Gear	0
7	M		4	Comb	1
8	M	Poor people have it. Rich people need it. If you eat it you die.	1	Money	0
8	M		2	Nothing	1
8	M		3	Luxury items	0
8	M		4	Brain	0
9	M	Which instrument produces a virtual image	1	Microscope	1

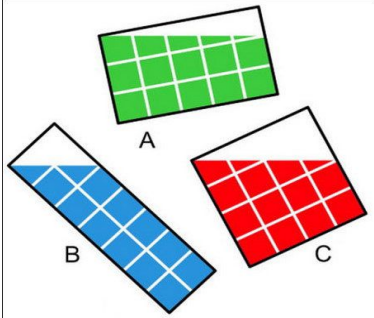


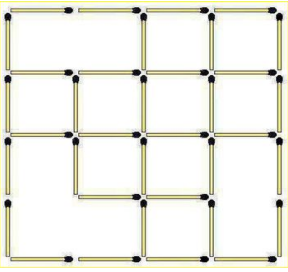
9	M		2	Bioscope	0
9	M		3	Telescope	0
9	M		4	None of the above	0
10	M		1	2	0
10	M		2	4	1
10	M		3	8	0
10	M		4	0	0
11	M	<p>Find the differences.</p> 	1	A	0
11	M		2		0
11	M		3		1
11	M		4		0
12	M	Select the correct plural form for the given word	1	Mice	1
12			2	Mouses	0
12			3	Mouese	0
12			4	None of the Above	0
13	M	<p>What is the # of the parking spot covered up by the car?</p> 	1	99	0
13	M		2	87	1
13	M		3	93	0
13	M		4	91	0
14	M	Fill in the blank with the suitable article:	1	A	0
14	M		2	No article	1
14	M		3	An	0
14	M		4	The	0
15	M	<p>Can you count the number of concentric circles in the picture below?</p> 	1	11	0
15	M		2	10	0
15	M		3	9	1
15	M		4	8	0

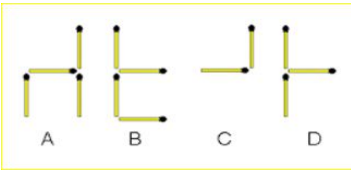


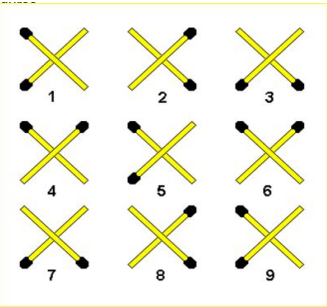
16	M	Look carefully at the picture below and identify which glass will be filled first? 	1	1	0
16	M		2	7	0
16	M		3	All the glasses	0
16	M		4	None of the glasses	1
17	M	One of 	1	A	0
17	M		2	B	1
17	M		3	Both A and B	0
17	M		4	Not A and B	0
18	M	Choose the one which best expresses the given sentence in Passive/Active voice. They greet me cheerfully every morning	1	Every morning I was greeted cheerfully.	0
18	M		2	Cheerful greeting is done by them every morning to me.	0
18	M		3	I am greeted cheerfully by them every morning.	1
18	M		4	I am being greeted cheerfully by them every morning.	0
19	M	Which two things are wrong in the study room picture? 	1	Calendar and Phone	0
19	M		2	Cup and Chair	0
19	M		3	Chair and Keyboard	0
19	M		4	Keyboard and calendar	1
20	M	There are 4 glasses of water filled with different objects. Can you find which glass contains most water? 	1	A	0
20	M		2	B	0
20	M		3	C	1
20	M		4	D	0
21	M	How many girls are there in the picture below? 	1	2	1
21	M		2	4	0
21	M		3	8	0
21	M		4	12	0



22	M	<p>Two Dogs Blacky And Brownly were fighting over the bone and eventually, a small piece fell off the bone. Out of 14 small bone pieces which is the broken part of the bone?</p> 	4	0	
22	M		1	0	
22	M		8	0	
22	M		2	1	
23	M	<p>Directions: The following question, consist of two words each that have a certain relationship to each other, followed by four lettered pairs of words. Select the lettered pair that has the same relationship as the original pair of words. EYES : TEARS ::</p>	1	sea : water	0
23	M		2	volcano : lava	1
23	M		3	heart : artery	0
23	M		4	hunger : bred	0
25	M	<p>How many 3's can you find on this mobile screen?</p> 	7	0	
25	M		14	1	
25	M		16	0	
25	M		4	0	
26	M	<p>Princess Tiana was locked in the building. The door number 4 s the escape door and in the rest two doors, dangerous murderers are waiting to kill her. Which is door number 4?</p> 	1	1	
26	M		2	0	
26	M		3	0	
26	M		None of the door	0	
27	M	<p>Can you order the 4 guys in order of their stupidity?</p> 	4, 1, 2 and 3	1	
27	M		2, 1, 4 and 3	0	
27	M		1, 2, 3 and 4	0	
27	M		3, 1, 2 and 4	0	

28	M	Can you identify the next number in this viral matchsticks Puzzle? 	2	0
28	M		4	0
28	M		6	0
28	M		1	1
29	M	Just look carefully at the below picture. Can you figure out how many ducks are there? 	16	1
29	M		14	0
29	M		8	0
29	M		9	0
30	M	In the picture you will see 6 chillis, only one of them is drawn and all others are real. Can you spot the drawn chili? 	2	0
30	M		7	0
30	M		4	1
30	M		5	0
31	M	Can you solve the maze below to identify which scooter will reach the petrol first? 	A	0
31	M		B	1
31	M		C	0
31	M		D	0
32	M	Can you find the table height given in the picture below? 	30	1

31	M		27	0
31	M		32	0
31	M		26	0
32	M	<p>How many women faces can you find in the picture below?</p> 	9	0
32	M		7	1
32	M		8	0
32	M		6	0
33	M	<p>Count the number of circles that contain a black dot.</p> 	16	0
33	M		8	0
33	M		9	0
33	M		12	1
34	M	<p>Which shape will come next in the pattern?</p> 	A	0
34	M	D	B	0
34	M		C	1
34	M		D	0
35	M	<p>Can you find the real bird in the picture below?</p> 	1	0
35	M		7	0
35	M		4	1
35	M		6	0

36	M	Which of below figure has maximum painted area? 	A	1
36	M		B	0
36	M		C	0
36	M		Equal area	0
37	M	As shown in the picture below, A woman is found dead in the ladies' bathroom. Can you find the killer? 	1	0
37	M		2	0
37	M		3	1
37	M		4	0
38	M	Choose the correct shadow of the bird? 	1	0
38	M		6	0
38	M		2	0
38	M		5	1
39	M	Can you count the number of squares in this matchstick puzzle below? 	16	1
39	M		10	0
39	M		13	0
39	M		15	0

40	M	Which of the below images is the odd one out? 	A	0
40	M		B	0
40	M		C	1
40	M		D	0
41	M	Can you solve below tricky maths equation and found the value of cup? 	5	1
41	M		10	0
41	M		20	0
41	M		30	0
42	M	Which the right charger for the phone? 	A	0
42	M		B	0
42	M		C	1
42	M		None of the A,B,C	0
43	M	This is a quickfire matchstick riddle in which you need to quickly find two identical figures. 	2 and 4	0
43	M		5 and 9	1
43	M		1 and 2	0
43	M		3 and 6	0

44	M	Which pit stop will the car reach? 		Pit Stop A	0
44	M			Pit Stop B	0
44	M			Pit Stop C	1
44	M			Pit Stop D	0
45	M	Indiana Jones was on the treasure hunt search and found the below picture on the way which is pointing to the direction towards the treasure. In which direction should he move? 		South	1
45	M			North	0
45	M			East	0
45	M			West	0
46	M	Directions: The following question, consist of two words each that have a certain relationship to each other, followed by four lettered pairs of words. Select the lettered pair that has the same relationship as the original pair of words. Yard: Inch :: Quart : ?	1	Oil	0
46	M		2	Liquid	0
46	M		3	ounce	1
46	M		4	None of these	0
47	M	If Anand is the brother of Bimala; Bimala is the sister of Chetan; and Chetan is the father of D, how D is related to Anand?	1	Nephew	0
47	M		2	Brother	0
47	M		3	sister	0
47	M		4	Cannot be determined	1
48	M	A man shows his friend a woman sitting in a park and says that she is the daughter of my grandmother's only son. What is the relation between the two?	1	Sister	0
48	M		2	Cousin	0
48	M		3	Either 1 or 2	1
48	M		4	None of these	0
49	M	All men are vertebrates. Some mammals are vertebrates. Which of the following conclusions drawn from the above statement is correct?	1	All mammals are men	0
49	M		2	All men are mammals	0
49	M		3	Some vertebrates are mammals.	1
49	M		4	All are correct	0
50	M	All birds are animals. All animals are four legged. Implications: a. All animals which are four legged are birds. b. All birds are four legged c. Some birds not are four legged d. Some birds are animals but not four legged.		a and b	0
50	M			b and c	0
50	M			only b	1
50	M			only d	0
51	M	In the following question, select the related word from the given alternatives. Insult : Humiliation		Shoot : Death	1
51	M			Abuse : Happy	0
51	M			Dog : Bark	0
51	M			None of these	0
52	M	The following question, consist of two words each that have a certain relationship to each other, followed by four lettered pairs of words. Select the lettered pair that has the same relationship as the original pair of words. Always : Never		Often : Rarely	1
52	M			Frequently : Normally	0
52	M			Constantly : Frequently	0
52	M			Intermittently : Casually	0
53	M	Identify the pair of words which has a relationship similar to the pair in question. Pale: Tale		Foil : Toil	1
53	M			Custom : Solemn	0
53	M			Habit : Old	0
53	M			Story : Epic	0
54	M	Select the correct tense: She had played carrom.		Future perfect	0
54	M			Present perfect	0
54	M			Past perfect	1
54	M			None of the above	0

55	M	Select the correct plural form for the given word: Series	Serii	0
55	M		Serieses	0
55	M		Seria	0
55	M		Series	1
56	M	Pick out the most effective words from the given words to fill in the blank to make the sentence meaningfully complete. I _____ with my sister _____ I find an apartment.	have been living, since	0
56	M		am living, until	1
56	M		am living, since	0
56	M		had been living, since	0
57	M	Select the one which expresses the same sentence in the passive voice. I will clear the physical exam.	The physical exam will be cleared by me.	1
57	M		The physical exam was cleared by me.	0
57	M		The physical exam would be cleared by me.	0
57	M		The physical exam is cleared by me.	0
58	M	Select the correct tense. Kiran had been working in a bank for some years.	Past perfect continuous	1
58	M		Past perfect.	0
58	M		Past continuous	0
58	M		None of the above	0
59	M	Fill in the blank with the suitable gerund: I could not help _____ the picture.	Admire	0
59	M		To admire	0
59	M		Admiring	1
59	M		To admiring	0
60	M	Fill in the blank with the suitable gerund: Stop _____ nonsense.	Making	0
60	M		Talking	1
60	M		In talking	0
60	M		In making	0
61	M	Fill in the blank with the suitable gerund: _____ ice cream on a hot, sunny day is very welcoming.	eating	1
61	M		eat	0
61	M		ate	0
61	M		on eating	0
62	M	Fill in the blank with the correct form of tense: He _____ a fortune by writing various kinds of books.	did making	0
62	M		would made	0
62	M		Is making	1
62	M		will made	0
63	M	Given following sequence, find the next term in the series: 0, 2, 4, 6, 8, 12, 12, 20, 16, _____	20	0
63	M		18	0
63	M		30	1
63	M		14	0
64	M	Choose the word or phrase which best completes the sentence. Pneumonia is a disease _____ eliminated now.	who as been	0
64	M		who had been	0
64	M		Which has been	1
64	M		non of the above	0
65	M	If it takes five minutes to boil one egg, how long will it take to boil four eggs together?	Twenty	0
65	M		Five	1
65	M		twenty five	0
65	M		ten	0
66	M	A person has to make 146 pieces of a long bar. He takes 4 seconds to cut a piece. What is the total time taken by him in seconds to make 146 pieces?	584	0
66	M		730	0
66	M		725	0
66	M		580	1
67	M	How many Women Military Soldiers have been inducted into the Indian Army?	83 Women	1
67	M		56 Women	0
67	M		100 Women	0
67	M		120 Women	0
68	M	Which organization has issued guidelines on Bharat Yatra Suraksha?	ESIC	0
68	M		PFRDA	0
68	M		IRDAI	1
68	M		RBI	0
67	M	When is the Army day celebrated ?	15th January	1
67	M		26th January	0
67	M		15th August	0
67	M		1st April	0
68	M	Which travels faster : the fastest plane or a bullet	Plane	0
68	M		Bullet	1
68	M		Both A and B	0
68	M		Air	0
69	M	The government allowed hospitals, dispensaries, and COVID-19 care centres to accept cash payments above how much amount from patients or their kin till May 31?	Rs.1 lakh	0
69	M		Rs.3 lakh	0
69	M		Rs.2.5 lakh	0
69	M		Rs.2 lakh	1
70	M	The HAL demonstrated which advanced light helicopter its deck operations capabilities?	Dhruv	1
70	M		Arjun	0
70	M		Aditya	0
70	M		Tridev	0
71	M	India has permitted which state to fly drones for experimental delivery of COVID-19 vaccines?	Telangana	1
71	M		Madhya Pradesh	0
71	M		Gujarat	0
71	M		Andhra Pradesh	0

72	M	An Oxygen Manufacturing plant has been inaugurated by Amit Shah at Kolavada village in which city?	Gandhinagar	1
72	M		Pune	0
72	M		Mumbai	0
72	M		Surat	0
73	M	The largest COVID Care Centre of MP has built in which city?	Bhopal	0
73	M		Jabalpur	0
73	M		Gwalior	0
73	M		Indore	1
74	M	Who has announced the World's Largest 2-Wheeler Charging Network?	Uber	0
74	M		Ola	1
74	M		GM	0
74	M		Rapido	0
75	M	PM Modi has sanctioned the procurement of how many portable oxygen concentrators under PM Cares Fund?	50000	0
75	M		75000	0
75	M		100000	1
75	M		80000	0
76	M	The bilateral exercise 'VARUNA-2021' is being held in which place?	Indian Ocean	0
76	M		Arctic Ocean	0
76	M		Andaman Sea	0
76	M		Arabian Sea	1
77	M	Grand Central Terminal, Park Avenue, New York is the world's	largest railway station	1
77	M		highest railway station	0
77	M		longest railway station	0
77	M		None of the above	0
78	M	For which of the following disciplines is Nobel Prize awarded?	Physics and Chemistry	0
78	M		Physiology or Medicine	0
78	M		Literature, Peace and Economics	0
78	M		All of the above	1
79	M	Which state's unit has launched an Ayurvedic Doctors on Call service?	Bihar	0
79	M		Gujarat	1
79	M		Uttar Pradesh	0
79	M		Maharashtra	0
80	M	FFC stands for	Foreign Finance Corporation	0
80	M		Film Finance Corporation	1
80	M		Federation of Football Council	0
80	M		None of the above	0
81	M	Film and TV institute of India is located at ?	Pune (Maharashtra)	1
81	M		Rajkot (Gujarat)	0
81	M		Pimpri (Maharashtra)	0
81	M		Perambur (Tamilnadu)	0
82	M	DRDL stands for ?	Defence Research and Development Laboratory	1
82	M		Department of Research and Development Laboratory	0
82	M		Differential Research and Documentation Laboratory	0
82	M		None of the above	0
83	M	Golden Temple, Amritsar is India's	largest Gurdwara	1
83	M		oldest Gurdwara	0
83	M		Both option A and B	0
83	M		None of the above	0
84	M	Durand Cup is associated with the game of ?	Cricket	0
84	M		Football	1
84	M		Hockey	0
84	M		Volleyball	0
85	M	Which word does NOT belong with the others?	Index	0
85	M		Glossary	0
85	M		Chapter	0
85	M		Book	1
86	M	CUP : LIP :: BIRD : ?	GRASS	0
86	M		FOREST	0
86	M		BEAK	1
86	M		BUSH	0
87	M	Which was the first Indian movie nominated for Oscar?	Salaam Bombay	1
87	M		Lagaan	0
87	M		Mother India	0
87	M		None of these	0
88	M	Where is the headquarter of World Tourism Organization located?	New York, USA	0
88	M		Vienna, Austria	0
88	M		Madrid, Spain	1
88	M		Sydney, Australia	0
89	M	Where is the headquarters of Swiggy located?	Hyderabad	0
89	M		Pune	0
89	M		Bengaluru	1
89	M		Chennai	0
90	M	Ionic compound are soluble in:	Ether	0
90	M		Alcohol	0
90	M		Kerosene	0
90	M		Water	1
91	M	The process of transfer of hereditary character from one generation to another is known as?	Genes	0
91	M		Mutation	0
91	M		Variation	0
91	M		Genetics	1
92	M	In India, how many banks are nationalised?	4	0
92	M		14	0
92	M		11	0
92	M		19	1
93	M	Which among the following state has the lowest birth rate?	Tamil Nadu	0
93	M		Kerala	1
93	M		Maharashtra	0
93	M		Madhya Pradesh	0
94	M	Which railway station has become the first in India to get Wi-Fi facility from Indian railways?	Bengaluru	1
94	M		Chennai	0

94	M		Mumbai	0
94	M		New Delhi	0
95	M	Which of the following approaches national income from the distribution method?	Product method	0
95	M		Income method	1
95	M		Expenditure method	0
95	M		Finance method	0
96	M	Who presides the joint sitting of both the houses of parliament?	President	0
96	M		Vice President	0
96	M		Speaker of the lok sabha	1
96	M		Chairman of the Rajya sabha	0
97	M	How many legs does a spider have?	Four	0
97	M		Five	0
97	M		Seven	0
97	M		Eight	1
98	M	Which is the largest flower in the world?	Rafflesia	1
98	M		Sun flower	0
98	M		Lilly	0
98	M		Lotus	0
99	M	The ratio of width of our national flag to its length is ?	a) 3:5	0
99	M		b) 2:3	1
99	M		c) 2:4	0
99	M		d) 3:4	0
100	M	'Madhubani', a style of folk paintings, is popular in which of the following states in India?	Uttar Pradesh	0
100	M		Rajasthan	0
100	M		Madhya Pradesh	0
100	M		Bihar	1