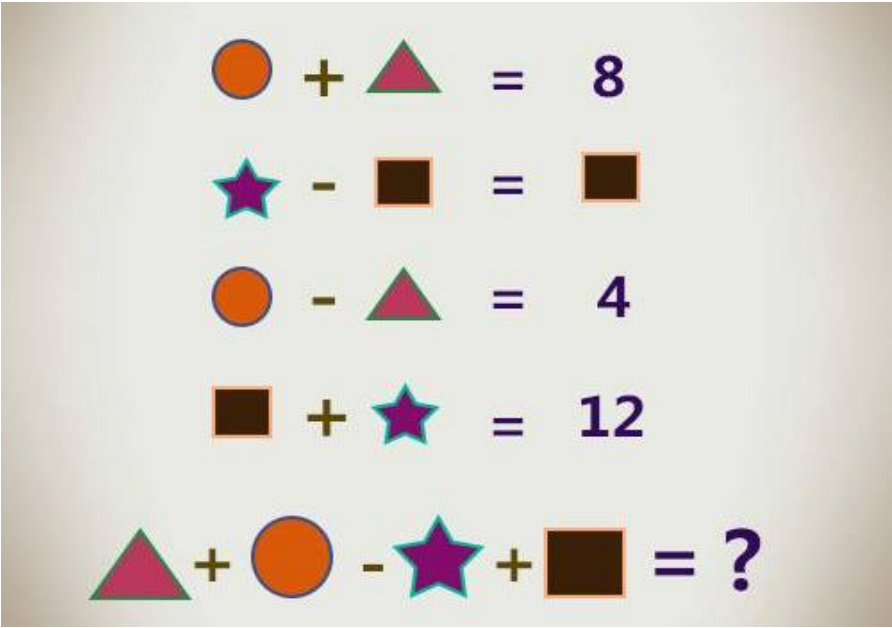



Q ID	Question Stimulus	Option No.	Option Text
1	Which one of the following is not a prime number?	1	31
1		2	61
1		3	71
1		4	<b>91</b>
2	If a giraffe has two eyes, a monkey has two eyes, and an elephant has two eyes, how many eyes do we have?	1	3
2		2	<b>4</b>
2		3	1
2		4	2


3	'Rhythm of eyes' city name in India?	1	Chennai
3		2	Nainital
3		3	Karnataka
3		4	Srinagar
4	They come out at night without being called and are lost in the day without being stolen. What are they?	1	Light
4		2	Bats
4		3	<b>Stars</b>
4		4	Flights
5	What is black when you buy it, red when you use it, and gray when you throw it away?	1	Shoe
5		2	<b>Charcoal</b>


5		3	Belt
5		4	All the above
6	Key, Door, Lock, Room, Switch on. the words given in a meaningful sequence.	1	1, 3, 2, 4, 5
6		2	4, 2, 1, 5, 3
6		3	1, 2, 3, 5, 4
6		4	5, 1, 2, 4, 3
7	What has teeth but cannot bite?	1	Saw
7		2	Zipper
7		3	Gear
7		4	<b>Comb</b>

8	<p>Poor people have it. If you eat it you die.</p> <p style="text-align: center;">Rich people need it.</p>	1	Money
8		2	<b>Nothing</b>
8		3	Luxury items
8		4	Brain
9	Which instrument produces a virtual image	1	<b>Microscope</b>
9		2	Bioscope

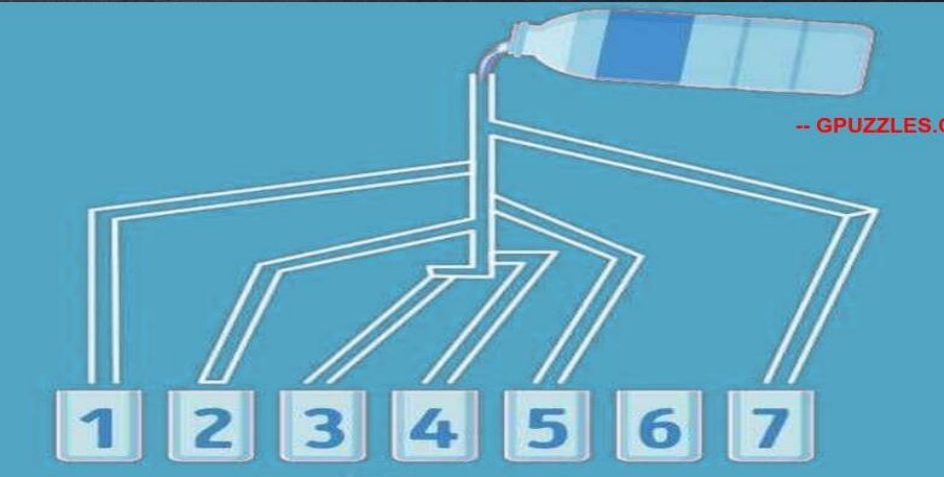
9		3	Telescope
9		4	None of the above
10	 <p> <math>\text{Orange Circle} + \text{Pink Triangle} = 8</math>  <math>\text{Purple Star} - \text{Brown Square} = \text{Brown Square}</math>  <math>\text{Orange Circle} - \text{Pink Triangle} = 4</math>  <math>\text{Brown Square} + \text{Purple Star} = 12</math>  <math>\text{Pink Triangle} + \text{Orange Circle} - \text{Purple Star} + \text{Brown Square} = ?</math> </p>	1	2
10		2	4


10		3	8
10		4	0
11	<p>Find the differences.</p> 		A
11		2	b
11		3	c
11		4	Ab
12	Select the correct plural form for the given word	1	<b>Mice</b>
12		2	Mouses


12		3	Mouese
12		4	None of the Above
13	<p>What is the # of the parking spot covered up by the car?</p> 	1	99
13		2	<b>87</b>
13		3	93
13		4	91
14	Fill in the blank with the suitable article:	1	A
14		2	<b>No article</b>
14		3	An
14		4	The

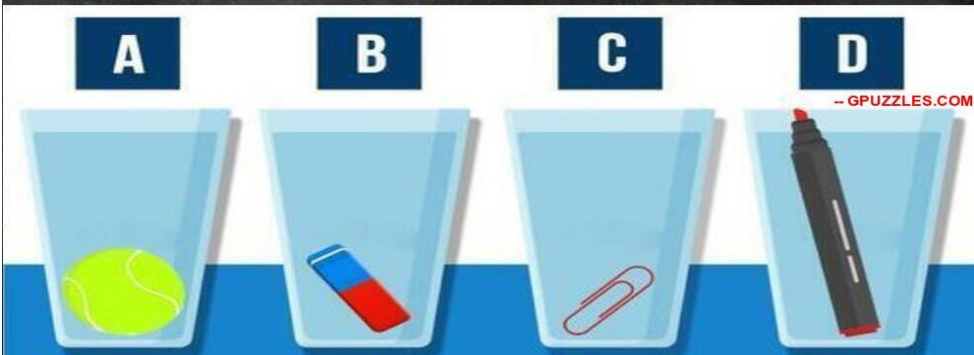
15	Can you count the 	1	11
15		2	10
15		3	<b>9</b>
15		4	8




16	<p>Look carefully at the picture below and identify which glass will be filled first?</p> 	1	1
16		2	7
16		3	All the glasses
16		4	<b>None of the glasses</b>

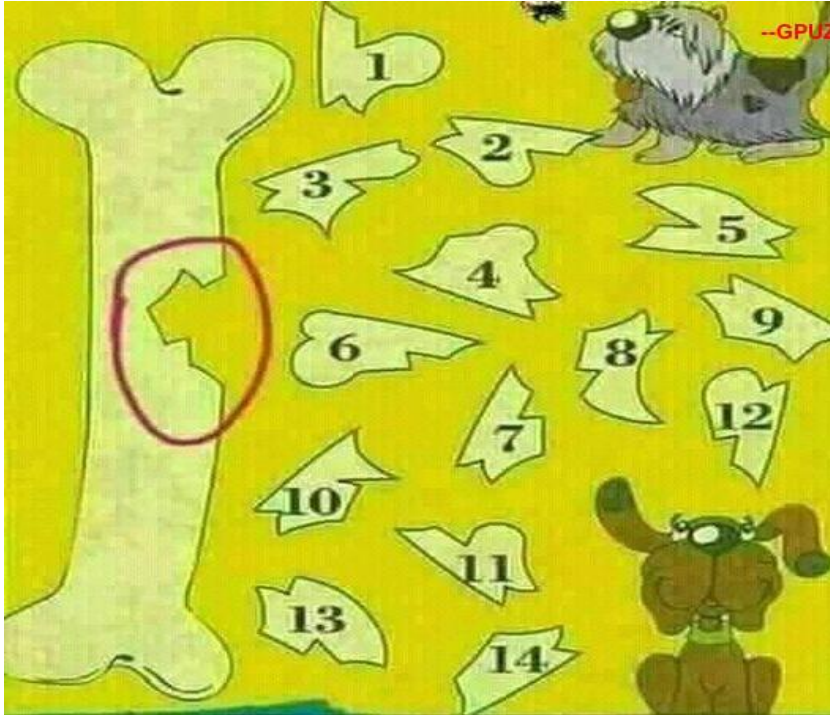
17	<p>One of tl</p> <div style="text-align: center;">  </div>	1	A
17		2	<b>B</b>
17		3	Both A and B
17		4	Not A and B
18	Choose the one which best expresses the given sentence in Passive/Active voice. They greet me cheerfully every morning	1	Every morning I was greeted cheerfully.
18		2	Cheerful greeting is done by them every morning to me.
18		3	<b>I am greeted cheerfully by them every morning.</b>
18		4	I am being greeted cheerfully by them every morning.

19	<p>Which two things are wrong in the study room picture?</p> 	1	Calendar and Phone
19		2	Cup and Chair
19		3	Chair and Keyboard
19		4	<b>Keyboard and calendar</b>

20	<p>There are 4 glasses of water filled with different objects. Can you find which glass contains most water?</p> 	1	A
20		2	B
20		3	C
20		4	D

21	<p>How many girls are there in the picture below?</p> 		
21		2	4
21		3	8
21		4	12

Two Dogs Blacky And Brownny were fighting over the bone and eventually, a small piece fell off the bone. Out of 14 small bone pieces which is the broken part of the bone?



22

4

22

1

22

8

22

2

23	Directions: The following question, consist of two words each that have a certain relationship to each other, followed by four lettered pairs of words. Select the lettered pair that has the same relationship as the original pair of words. EYES : TEARS ::	1	sea : water
23		2	<b>volcano : lava</b>
23		3	heart : artery
23		4	hunger : bred

How many 3's can you find on this mobile screen?



25

1

7

25

2

14

25

3


16


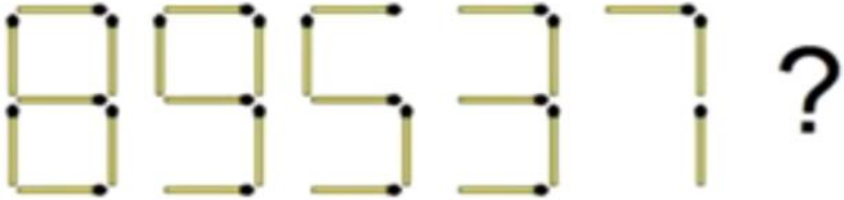
25


4


4



26	<p>Princess Tiana was locked in the building. The door number 4 s the escape door and in the rest two doors, dangerous murderers are waiting to kill her. Which is door number 4?</p> 	1	1
26		2	2
26		3	3
26		4	None of the door

27	<p>Can you order the 4 guys in order of their stupidity?</p> 		4,1,2 and 3
27		2	2,1,4 and 3
27		3	1,2,3 and 4
27		4	3, 1,2 and 4
28	<p>Can you identify the next number in this viral matchsticks Puzzle?</p> 	1	2

28		2	4
28		3	6
28		4	1
29	<p>Just look carefully at the below picture. Can you figure out how many ducks are there?</p> 	1	16
29		2	14
29		3	8

29		4	9
30	<p>In the picture you will see 6 chillis, only one of them is drawn and all others are real. Can you spot the drawn chili?</p> 	1	2
30		2	7
30		3	4
30		4	5

Can you solve the maze below to identify which scooter will reach the petrol first?



30

1

A

30

2

B

30


3

C

30

4

D

31	<p>Can you find the table height given in the picture below?</p> 	1	30
31		2	27
31		3	32
31		4	26

How many women faces can you find in the picture below?



32

1 9

32

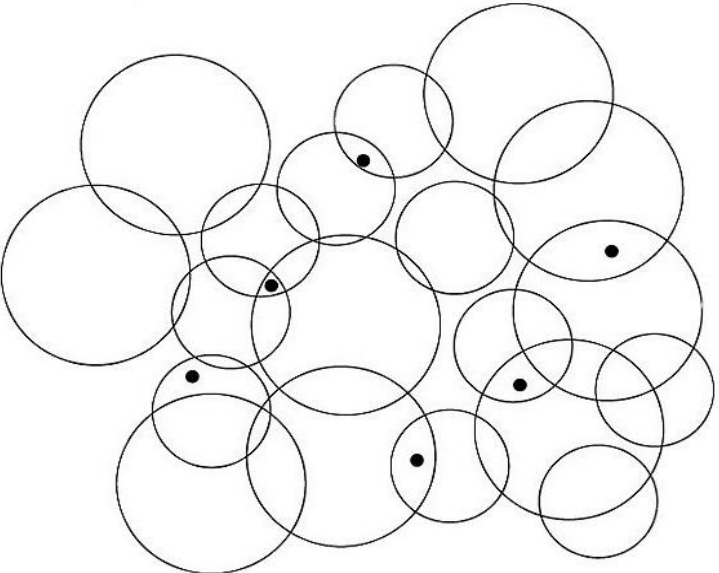
2 7

32

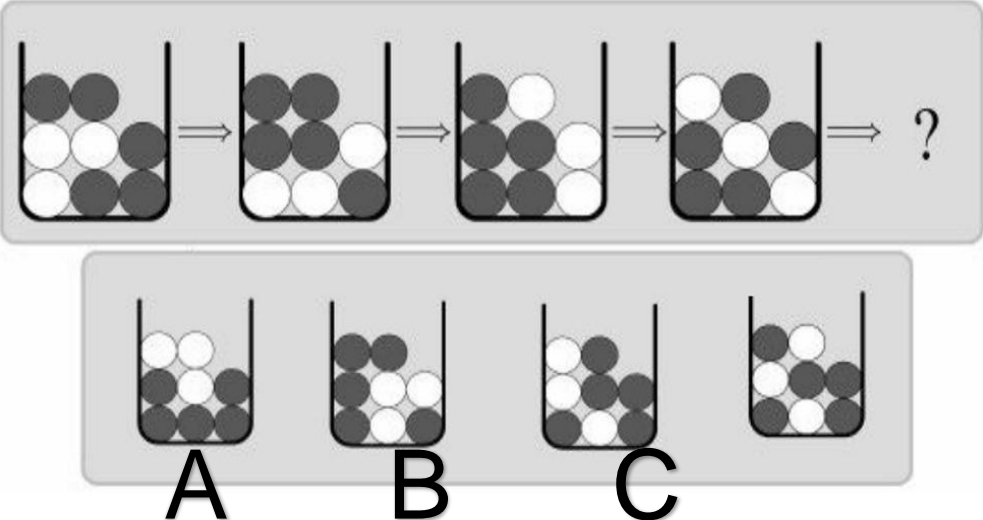
3 8


32

4 6

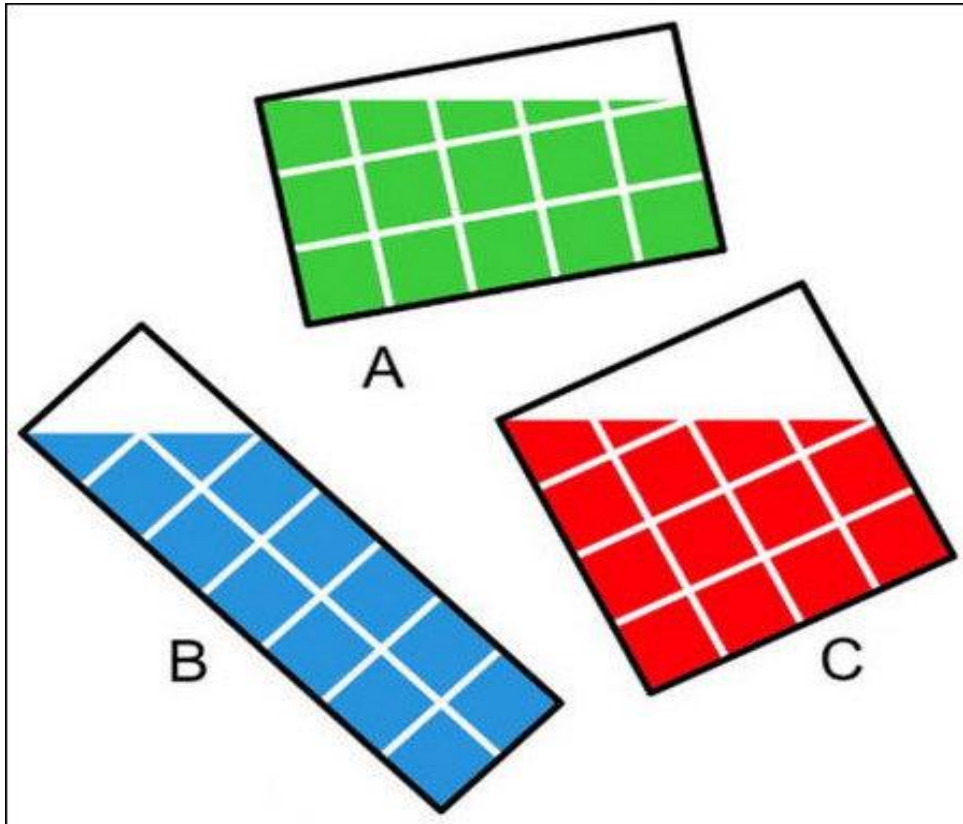
33	<p>Count the number of circles that contain a black dot.</p> 	1	16
33		2	8
33		3	9
33		4	<b>12</b>



34	<p>Which shape will come next in the pattern?</p>  <p>The pattern shows a sequence of four beakers, each containing 10 spheres in a 3x3 grid. The spheres are black and white. The sequence is:     <ul style="list-style-type: none"> <li>Beaker 1: 5 black, 5 white</li> <li>Beaker 2: 6 black, 4 white</li> <li>Beaker 3: 7 black, 3 white</li> <li>Beaker 4: 8 black, 2 white</li> </ul>     The question mark indicates the next beaker in the sequence. Below are four options:     <ul style="list-style-type: none"> <li>A: 4 black, 6 white</li> <li>B: 5 black, 5 white</li> <li>C: 6 black, 4 white</li> <li>D: 7 black, 3 white</li> </ul> </p>	1	A
34	D	2	B
34		3	C
34		4	D

35	<p>Can you find the real bird in the picture below?</p> 	1	1
35		2	7
35		3	4
35		4	6

Which of below figure has maximum painted area?



36

1

A

36

2

B

36

3

C

36

4

Equal area

As shown in the picture below, A woman is found dead in the ladies' bathroom. Can you find the killer?



37

1

1

37

2

2

37

3

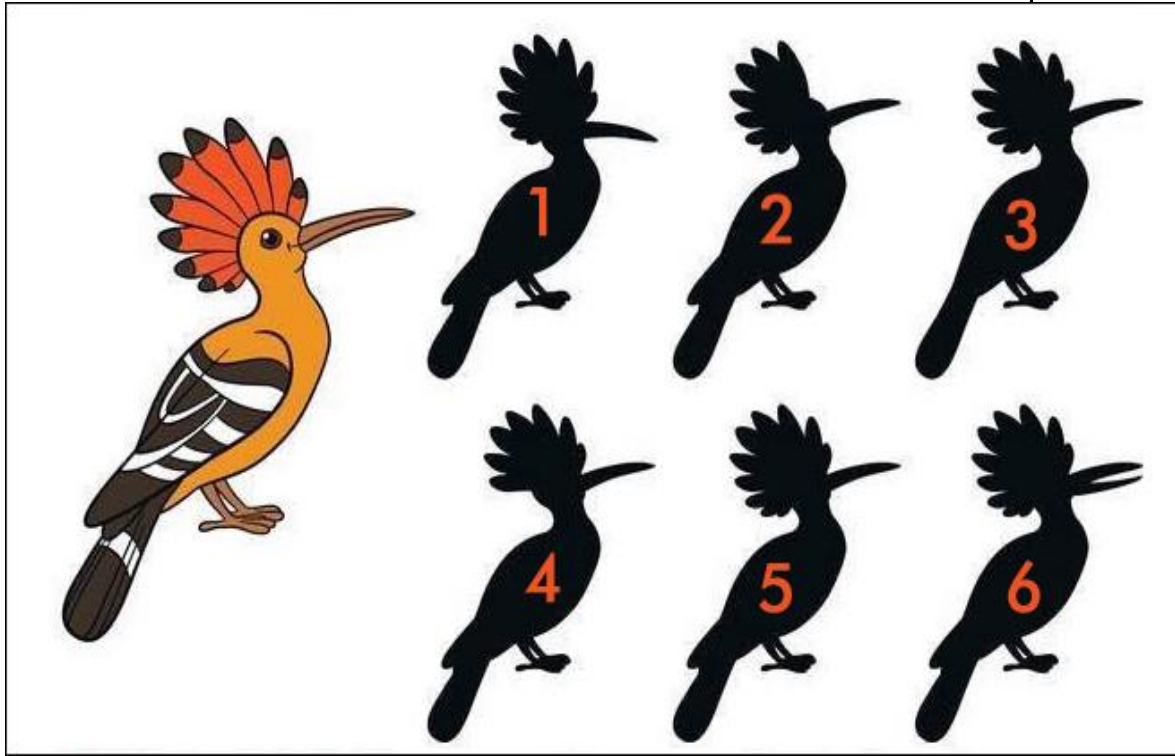
3

37

4

4

Choose the correct shadow of the bird?



38

1

38

2

6

38

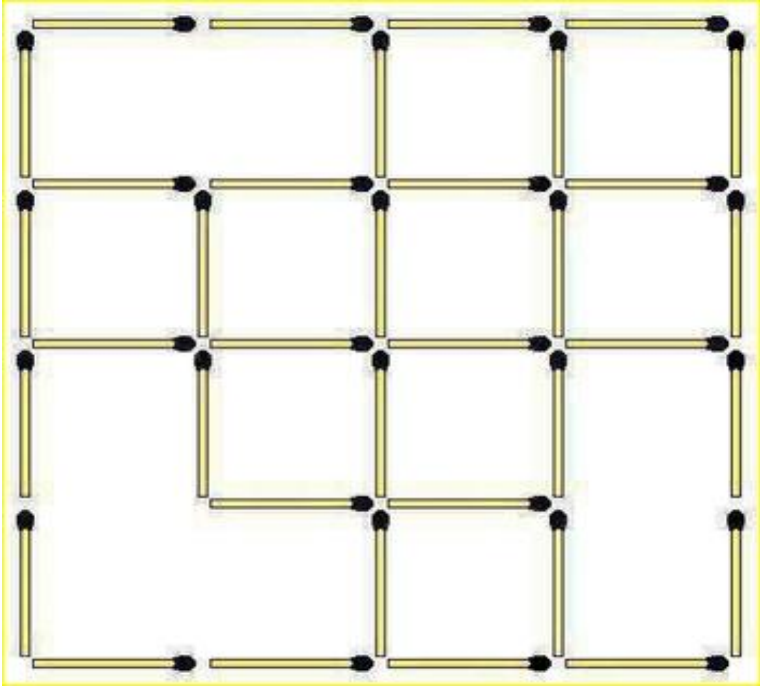
3

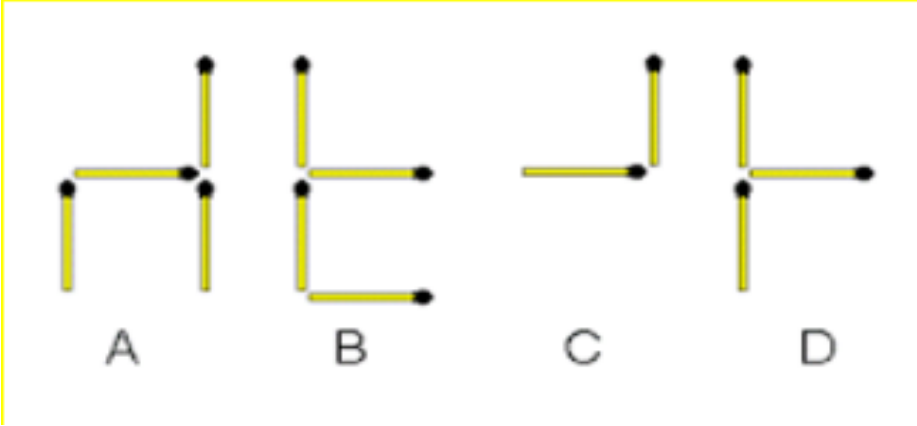
2

38

4

5

39	<p>Can you count the number of squares in this matchstick puzzle below?</p> 	1	16
39		2	10
39		3	13
39		4	15

40	<p>Which of the below images is the odd one out?</p> 	1	A
40		2	B
40		3	C
40		4	D

Can you solve below tricky maths equation and found the value of cup?



41

1

5

41

2

10

41

3


20

41

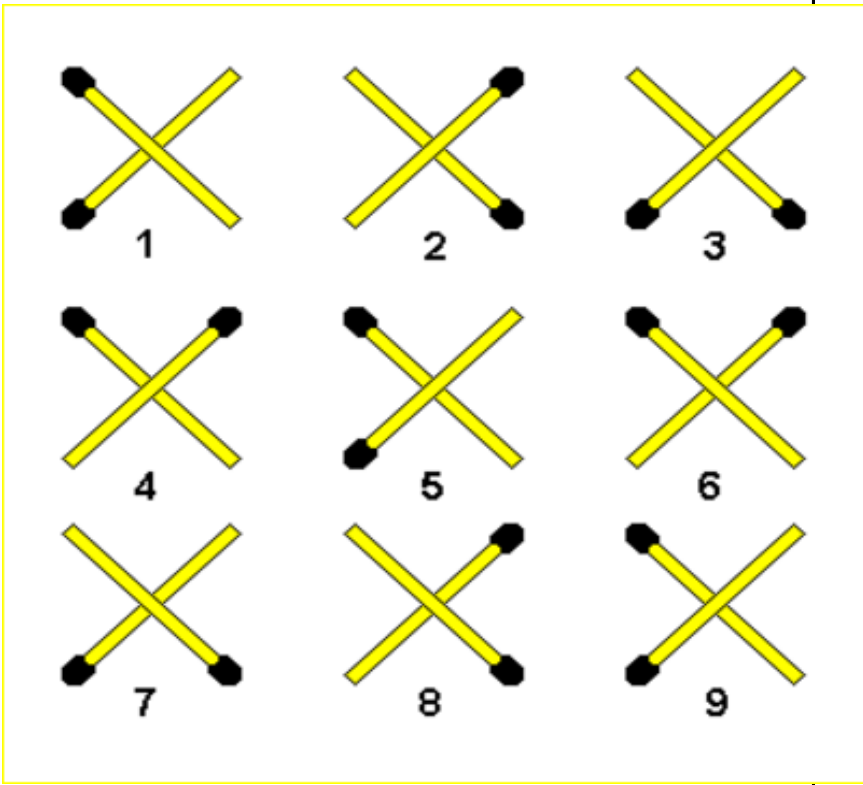
4

30



42	<p>Which the right charger for the phone?</p> 	1	A
42		2	B
42		3	C
42		4	None of the A,B,C

This is a quickfire matchstick riddle in which you need to quickly find two identical figures.



43

1

2 and 4

43

2

**5 and 9**

43


3

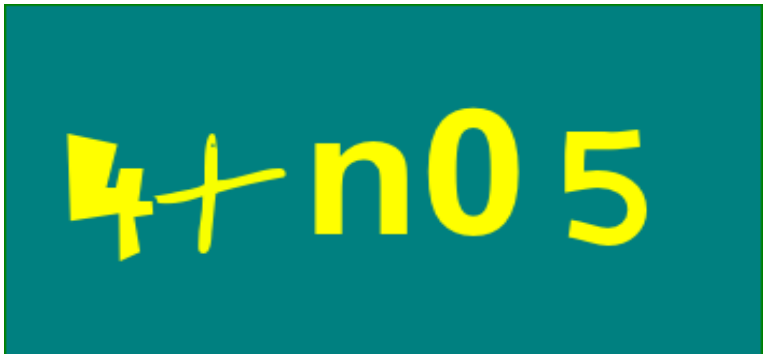
1 and 2

43

4

3 and 6

44	<p>Which pit stop will the car reach?</p> 		Pit Stop A
44		2	Pit Stop B
44		3	<b>Pit Stop C</b>
44		4	Pit Stop D

45	<p>Indiana Jones was on the treasure hunt search and found the below picture on the way which is pointing to the direction towards the treasure. In which direction should he move?</p> 	1	South
45		2	North
45		3	East
45		4	West
46	<p>Directions: The following question, consist of two words each that have a certain relationship to each other, followed by four lettered pairs of words. Select the lettered pair that has the same relationship as the original pair of words. Yard: Inch : : Quart : ?</p>	1	Oil
46		2	Liquid
46		3	<b>ounce</b>
46		4	None of these
47	<p>If Anand is the brother of Bimala; Bimala is the sister of Chetan; and Chetan is the father of D, how D is related to Anand?</p>	1	Nephew
47		2	Brother
47		3	sister
47		4	<b>Cannot be determined</b>
48	<p>A man shows his friend a woman sitting in a park and says that she is the daughter of my grandmother's only son. What is the relation between the two?</p>	1	Sister
48		2	Cousin

48		3	<b>Either 1 or 2</b>
48		4	None of these
49	All men are vertebrates. Some mammals are vertebrates. Which of the following conclusions drawn from the above statement is correct?	1	All mammals are men
49		2	All men are mammals
49		3	<b>Some vertebrates are mammals.</b>
49		4	All are correct
50	All birds are animals. All animals are four legged. Implications: a. All animals which are four legged are birds. b. All birds are four legged c. Some birds not are four legged d. Some birds are animals but not four legged.	1	a and b
50		2	b and c
50		3	<b>only b</b>
50		4	only d
51	In the following question, select the related word from the given alternatives. Insult : Humiliation	1	<b>Shoot : Death</b>
51		2	Abuse : Happy
51		3	Dog : Bark
51		4	None of these
52	The following question, consist of two words each that have a certain relationship to each other, followed by four lettered pairs of words. Select the lettered pair that has the same relationship as the original pair of words. Always : Never	1	<b>Often : Rarely</b>
52		2	Frequently : Normally
52		3	Constantly : Frequently
52		4	Intermittently : Casually
53	Identify the pair of words which has a relationship similar to the pair in question. Pale: Tale	1	<b>Foil : Toil</b>
53		2	Custom : Solemn
53		3	Habit : Old
53		4	Story : Epic
54	Select the correct tense: She had played carrom.	1	Future perfect
54		2	Present perfect
54		3	<b>Past perfect</b>
54		4	None of the above

55	Select the correct plural form for the given word: Series	1	Serii
55		2	Serieses
55		3	Seria
55		4	<b>Series</b>
56	Pick out the most effective words from the given words to fill in the blank to make the sentence meaningfully complete. I _____ with my sister _____ I find an apartment.	1	have been living, since
56		2	<b>am living, until</b>
56		3	am living, since
56		4	had been living, since
57	Select the one which expresses the same sentence in the passive voice. I will clear the physical exam.	1	<b>The physical exam will be cleared by me.</b>
57		2	The physical exam was cleared by me.
57		3	The physical exam would be cleared by me.
57		4	The physical exam is cleared by me.
58	Select the correct tense. Kiran had been working in a bank for some years.	1	<b>Past perfect continuous</b>
58		2	Past perfect.
58		3	Past continuous
58		4	None of the above
59	Fill in the blank with the suitable gerund: I could not help _____ the picture.	1	Admire
59		2	To admire
59		3	<b>Admiring</b>
59		4	To admiring
60	Fill in the blank with the suitable gerund: Stop _____ nonsense.	1	Making
60		2	<b>Talking</b>
60		3	In talking
60		4	In making
61	Fill in the blank with the suitable gerund: _____ ice cream on a hot, sunny day is very welcoming.	1	<b>eating</b>
61		2	eat
61		3	ate
61		4	on eating

62	Fill in the blank with the correct form of tense: He _____ a fortune by writing various kinds of books.	1	did making
62		2	would made
62		3	<b>Is making</b>
62		4	will made
63	Given following sequence, find the next term in the series: 0, 2, 4, 6, 8, 12, 12, 20, 16, _____	1	20
63		2	18
63		3	<b>30</b>
63		4	14
64	Choose the word or phrase which best completes the sentence. Pneumonia is a disease _____ eliminated now.	1	who as been
64		2	who had been
64		3	<b>Which has been</b>
64		4	non of the above
65	If it takes five minutes to boil one egg, how long will it take to boil four eggs together?	1	Twenty
65		2	<b>Five</b>
65		3	twenty five
65		4	ten
66	A person has to make 146 pieces of a long bar. He takes 4 seconds to cut a piece. What is the total time taken by him in seconds to make 146 pieces?	1	584
66		2	730
66		3	725
66		4	<b>580</b>
67	How many Women Military Soldiers have been inducted into the Indian Army?	1	<b>83 Women</b>
67		2	56 Women
67		3	100 Women
67		4	120 Women
68	Which organization has issued guidelines on Bharat Yatra Suraksha?	1	ESIC
68		2	PFRDA
68		3	<b>IRDAI</b>
68		4	RBI
67	When is the Army day celebrated ?	1	<b>15th January</b>
67		2	26th January
67		3	15th August
67		4	1st April
68	Which travels faster : the fastest plane or a bullet	1	Plane
68		2	<b>Bullet</b>
68		3	Both A and B

68		4	Air
69	The government allowed hospitals, dispensaries, and COVID-19 care centres to accept cash payments above how much amount from patients or their kin till May 31?	1	Rs.1 lakh
69		2	Rs.3 lakh
69		3	Rs.2.5 lakh
69		4	<b>Rs.2 lakh</b>
70	The HAL demonstrated which advanced light helicopter its deck operations capabilities?	1	<b>Dhruv</b>
70		2	Arjun
70		3	Aditya
70		4	Tridev
71	India has permitted which state to fly drones for experimental delivery of COVID-19 vaccines?	1	<b>Telangana</b>
71		2	Madhya Pradesh
71		3	Gujarat
71		4	Andhra Pradesh
72	An Oxygen Manufacturing plant has been inaugurated by Amit Shah at Kolavada village in which city?	1	<b>Gandhinagar</b>
72		2	Pune
72		3	Mumbai
72		4	Surat
73	The largest COVID Care Centre of MP has built in which city?	1	Bhopal
73		2	Jabalpur
73		3	Gwalior
73		4	<b>Indore</b>
74	Who has announced the World's Largest 2-Wheeler Charging Network?	1	Uber
74		2	<b>Ola</b>
74		3	GM
74		4	Rapido
75	PM Modi has sanctioned the procurement of how many portable oxygen concentrators under PM Cares Fund?	1	50000
75		2	75000
75		3	<b>100000</b>
75		4	80000
76	The bilateral exercise 'VARUNA-2021' is being held in which place?	1	Indian Ocean



76		2	Arctic Ocean
76		3	Andaman Sea
76		4	<b>Arabian Sea</b>
77	Grand Central Terminal, Park Avenue, New York is the world's	1	<b>largest railway station</b>
77		2	highest railway station
77		3	longest railway station
77		4	None of the above
78	For which of the following disciplines is Nobel Prize awarded?	1	Physics and Chemistry
78		2	Physiology or Medicine
78		3	Literature, Peace and Economics
78		4	<b>All of the above</b>
79	Which state's unit has launched an Ayurvedic Doctors on Call service?	1	Bihar
79		2	<b>Gujarat</b>
79		3	Uttar Pradesh
79		4	Maharashtra
80	FFC stands for	1	Foreign Finance Corporation
80		2	<b>Film Finance Corporation</b>
80		3	Federation of Football Council
80		4	None of the above
81	Film and TV institute of India is located at ?	1	<b>Pune (Maharashtra)</b>
81		2	Rajkot (Gujarat)
81		3	Pimpri (Maharashtra)
81		4	Perambur (Tamilnadu)
82	DRDL stands for ?	1	<b>Defence Research and Development Laboratory</b>
82		2	Department of Research and Development Laboratory
82		3	Differential Research and Documentation Laboratory
82		4	None of the above
83	Golden Temple, Amritsar is India's	1	<b>largest Gurdwara</b>
83		2	oldest Gurudwara
83		3	Both option A and B
83		4	None of the above
84	Durand Cup is associated with the game of ?	1	Cricket
84		2	<b>Football</b>

84		3	Hockey
84		4	Volleyball
85	Which word does NOT belong with the others?	1	Index
85		2	Glossary
85		3	Chapter
85		4	<b>Book</b>
86	CUP : LIP :: BIRD : ?	1	GRASS
86		2	FOREST
86		3	<b>BEAK</b>
86		4	BUSH
87	Which was the first Indian movie nominated for Oscar?	1	<b>Salaam Bombay</b>
87		2	Lagaan
87		3	Mother India
87		4	None of these
88	Where is the headquarter of World Tourism Organization located?	1	New York, USA
88		2	Vienna, Austria
88		3	<b>Madrid, Spain</b>
88		4	Sydney, Australia
89	Where is the headquarters of Swiggy located?	1	Hyderabad
89		2	Pune
89		3	<b>Bengaluru</b>
89		4	Chennai
90	Ionic compound are soluble in:	1	Ether
90		2	Alcohol
90		3	Kerosene
90		4	<b>Water</b>
91	The process of transfer of hereditary character from one generation to another is known as?	1	Genes
91		2	Mutation
91		3	Variation
91		4	<b>Genetics</b>
92	In India, how many banks are nationalised?	1	4
92		2	14
92		3	11
92		4	<b>19</b>
93	Which among the following state has the lowest birth rate?	1	Tamil Nadu
93		2	<b>Kerala</b>
93		3	Maharastra
93		4	Madhya Pradesh

94	Which railway station has become the first in India to get Wi-Fi facility from Indian railways?	1	<b>Bengaluru</b>
94		2	Chennai
94		3	Mumbai
94		4	New Delhi
95	Which of the following approaches national income from the distribution method?	1	Product method
95		2	<b>Income method</b>
95		3	Expenditure method
95		4	Finance method
96	Who presides the joint sitting of both the houses of parliament?	1	President
96		2	Vice President
96		3	<b>Speaker of the lok sabha</b>
96		4	Chairman of the Rajya sabha
97	How many legs does a spider have?	1	Four
97		2	Five
97		3	Seven
97		4	<b>Eight</b>
98	Which is the largest flower in the world?	1	Rafflesia
98		2	Sun flower
98		3	Lilly
98		4	Lotus
99	The ratio of width of our national flag to its length is ?	1	a) 3:5
99		2	<b>b) 2:3</b>
99		3	c) 2:4
99		4	d) 3:4
100	'Madhubani', a style of folk paintings, is popular in which of the following states in India?	1	Uttar Pradesh
100		2	Rajasthan
100		3	Madhya Pradesh
100		4	<b>Bihar</b>